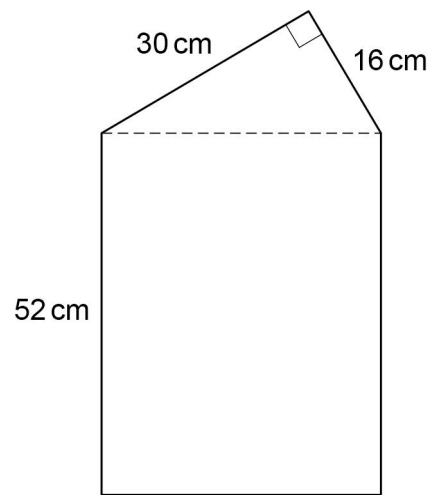


- 1 A shape is made by joining a right-angled triangle to a rectangle.



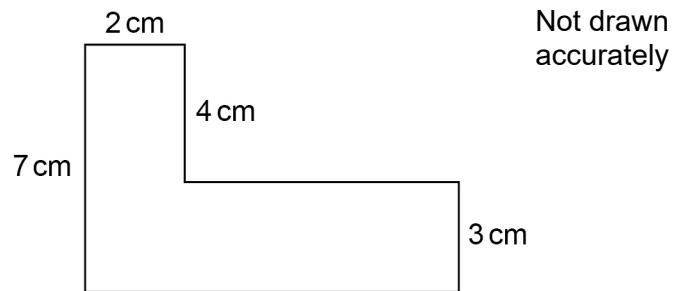
Not drawn
accurately

Work out the area of the shape.

[5 marks]

Answer _____ cm^2

2 The L-shape is made from rectangles.



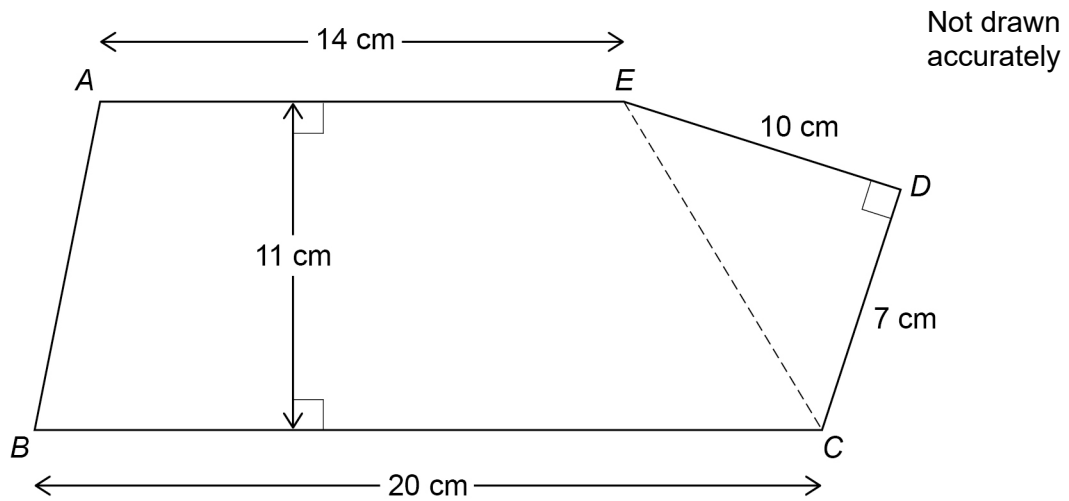
The area is 44 cm^2

Work out the perimeter.

[3 marks]

Answer _____ cm

3

 $ABCDE$ is a pentagon.

Work out the area of the pentagon.

[3 marks]

Answer _____ cm^2